

Decimal Unit 1B  
HUNDREDTHS & THOUSANDTHS  
on the Number line

HOMEWORK

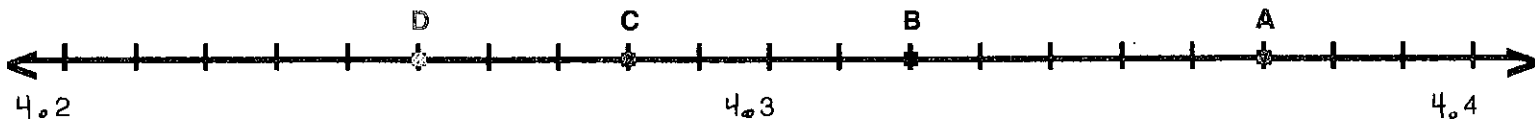
NAME: \_\_\_\_\_

DATE: \_\_\_\_\_

MATH: \_\_\_\_\_

Identify each letter with the decimal in numerical  
and written form.

1.



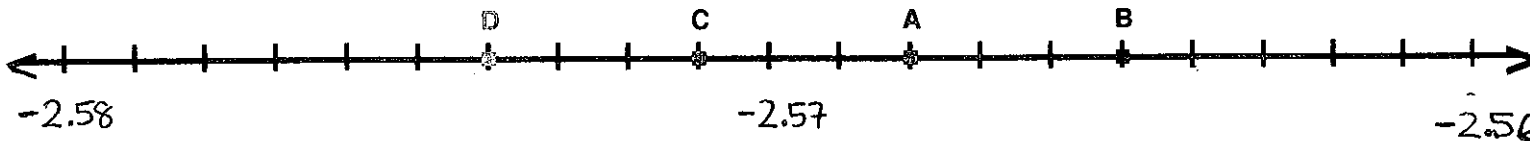
A:

B:

C:

D:

2.



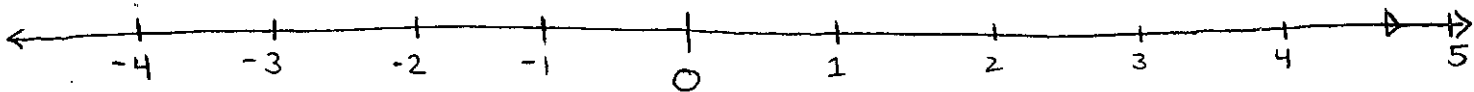
A:

B:

C:

D:

3. Highlight where questions 1 and 2 would be on  
this number line.



Decimal Unit 1B  
HUNDREDTHS & THOUSANDTHS  
on the Number line

HOMEWORK

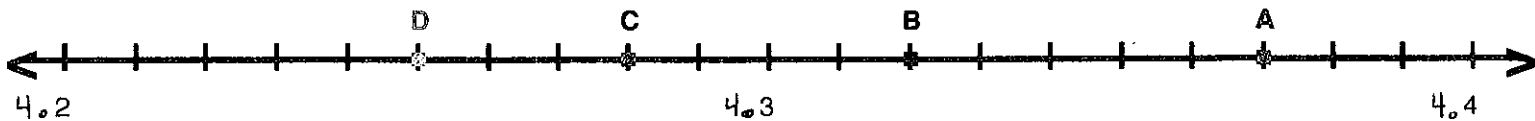
NAME: \_\_\_\_\_

DATE: \_\_\_\_\_

MATH: \_\_\_\_\_

Identify each letter with the decimal in numerical  
and written form.

1.



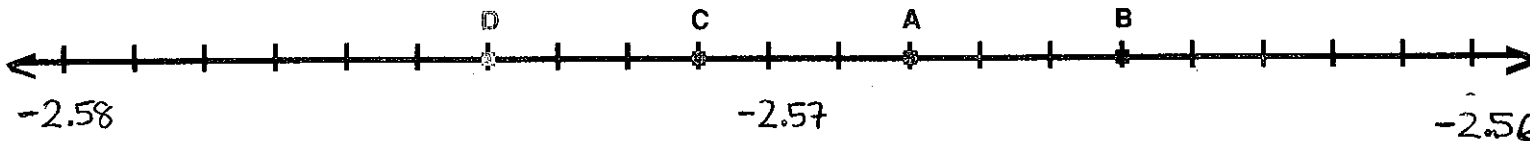
A:

B:

C:

D:

2.



A:

B:

C:

D:

3. Highlight where questions 1 and 2 would be on  
this number line.

